
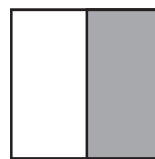


# Fractions – writing fractions

When we divide a whole into 2 equal parts, we call each part a half.



This is one whole shape.

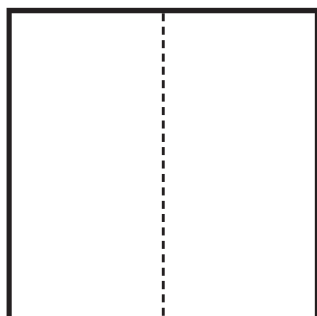


Half has been shaded.

We can write half as  $\frac{1}{2}$   $\frac{\text{Number of shaded parts}}{\text{Number of equal parts}}$

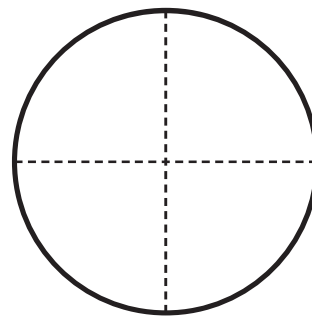
1 Shade **one** equal part of each shape and write the fraction.

a



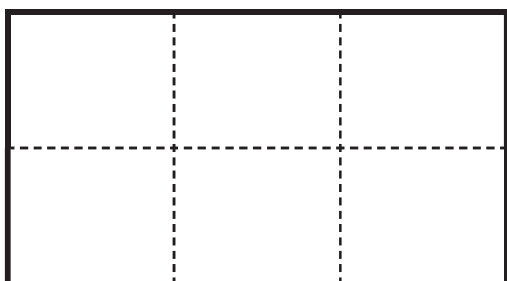
Number of shaded parts   
Number of equal parts

b



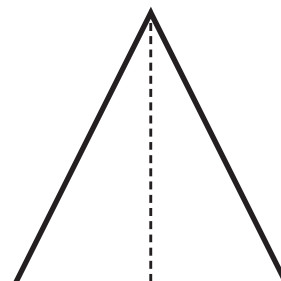
Number of shaded parts   
Number of equal parts

c



Number of shaded parts   
Number of equal parts

d



Number of shaded parts   
Number of equal parts